

SUMMATIVE ASSESSMENT - I, 2016-17
MATHEMATICS

Class - IX

Time Allowed : 3 hours

Maximum Marks: 90

General Instructions:

1. All questions are compulsory.
2. The question paper consists of 31 questions divided into four sections A, B, C and D. Section-A comprises of 4 questions of 1 mark each; Section-B comprises of 6 questions of 2 marks each; Section-C comprises of 10 questions of 3 marks each and Section-D comprises of 11 questions of 4 marks each.
3. There is no overall choice in this question paper.
4. Use of calculator is not permitted.

SECTION-A

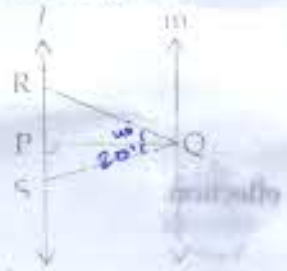
Question numbers 1 to 4 carry one mark each.

- | | | |
|-----|--|---|
| 1 | If $x^{1/12} = 49^{1/24}$, then find the value of x . | 1 |
| 2 ✓ | Factorise : $8y^3 - 125x^3$. | 1 |
| 3 ✓ | Is ΔABC possible, if $\angle A = 60^\circ$, $\angle B = 80^\circ$ and $\angle C = 40^\circ$? | 1 |
| 4 ✓ | Find the area of an equilateral triangle of side 8 cm. | 1 |

SECTION-B

Question numbers 5 to 10 carry two marks each.

- | | | |
|-----|--|---|
| 5 ✓ | Find two rational numbers between $0.121221222122221\dots$ and $0.141441444\dots$ in the $\frac{p}{q}$ form, where p and q are integers and $q \neq 0$. | 2 |
| 6 ✓ | Find the value of m , if $x + 2$ is a factor of $2x^2 + mx + 4$. | 2 |
| 7 | State any two of Euclid's five postulates. | 2 |
| 8 ✓ | In the figure $l \parallel m$. If $\angle P = 90^\circ$, $\angle RQP = 40^\circ$ and $\angle PQS = 20^\circ$, then find $\angle R$ and $\angle S$. | 2 |



- | | | |
|-----|--|---|
| 9 ✓ | On y -axis, plot four points such that distances between two consecutive points are equal. | 2 |
| 10 | Side of an equilateral triangle is 16 m. Find its area using Heron's formula. (Use $\sqrt{3} = 1.732$). | 2 |

SECTION-C

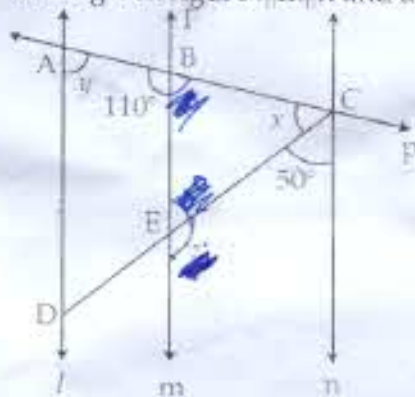
Question numbers 11 to 20 carry three marks each.

- | | | |
|----|--|---|
| 11 | Represent $\sqrt{3}$ on the number line. | 3 |
| 12 | Find the values of a and b , if $\frac{\sqrt{2} + 1}{\sqrt{2} - 1} - \frac{\sqrt{2} - 1}{\sqrt{2} + 1} = a + \sqrt{2} b$ | 3 |


- 13 If $x - y = 9$ and $xy = 2$, find the value of $x^3 - y^3$.
- 14 If $x^2 + y^2 = 20$ and $x + y = 6$, then find the value of $x^3 + y^3$.
- 15 Three lines AB, CD and EF meet at a point O, forming angles as shown in the figure. Find the values of x, y, z and u .



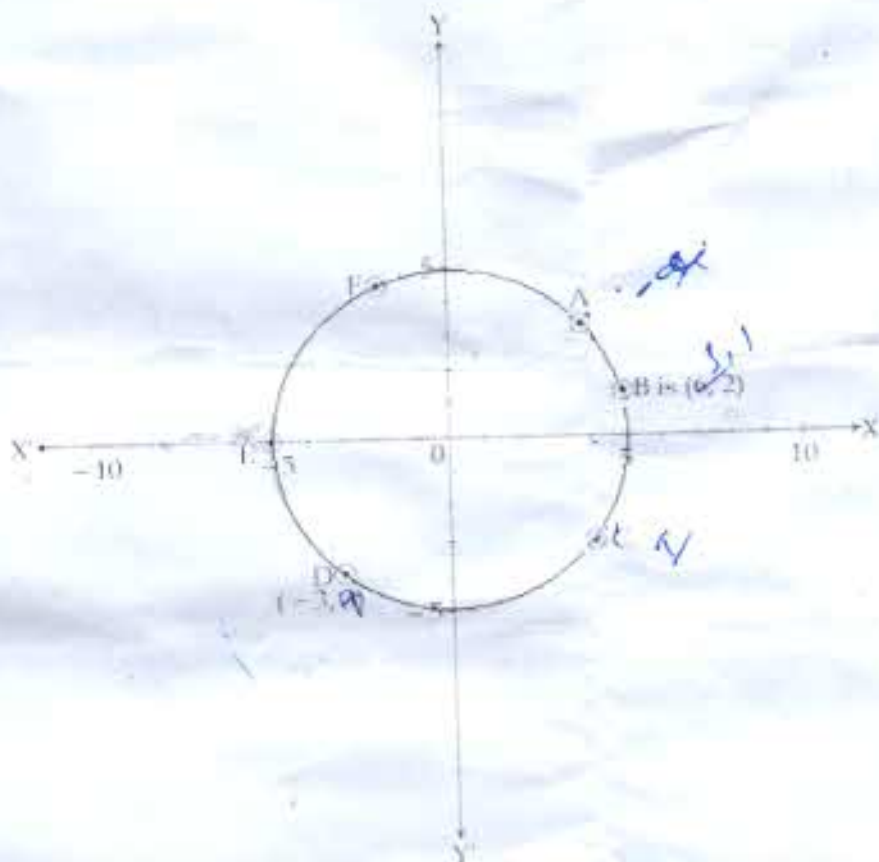
- 16 In the given figure $l \parallel m \parallel n$ and a transversal p intersects them. Find the values of x, y and z . 3



- 17 Find x and y in the given figure. 3



- 18 In an isosceles triangle LMN , $LM = LN$ and MP and NQ are two medians. Show that $MP = NQ$. 3
- 19 From the graph, write the coordinates of points A, B, C, D, E and F. Give the point of reflection of A in y -axis. Also, give point of reflection of C in x -axis. 3




- 20 In a rectangular field of dimensions $50\text{ m} \times 30\text{ m}$, a triangular park is constructed. If the dimensions of the park are 14 m , 15 m and 13 m , find the area of the remaining field. 3

SECTION-D

Question numbers 21 to 31 carry four marks each.

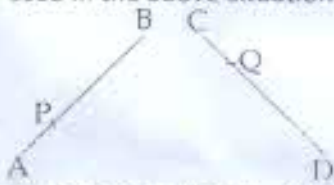
- 21 If $x = \frac{\sqrt{5} + 1}{\sqrt{5} - 1}$ and $y = \frac{\sqrt{5} - 1}{\sqrt{5} + 1}$, then find the value of $x^2 + y^2$ 4
- 22 If $\frac{9^{n+1} \times (3^{-n/2})^{-2} - 27^n}{(3^m \times 2)^3} = \frac{1}{729}$ and $m + n = 5$; find the values of m and n . 4
- 23 Find the value of the polynomial $p(x) = x^4 - 4x^3 + 3x^2 - 1$ at $x = 1, -\frac{1}{3}, \frac{1}{2}$ and -2 . 4
- 24 Using long division method, show that the polynomial $p(x) = x^3 + 1$ is divisible by $q(x) = x + 1$. Verify your result using factor theorem. 4
- 25 factorise: $2y^3 - 11y^2 + 17y - 6$ 4
- 26 If $3a - 2b + 5c = 5$ and $6ab + 10bc - 15ac = 14$, find the value of: $27a^3 + 125c^3 + 90abc - 8b^3$. 4
- 27 Teacher held two sticks AB and CD of equal length in her hands and marked their mid-points M and N respectively. She then asked the students whether AM is equal to ND or not. Arpita answered yes. Is Arpita correct? State axiom of Euclid's that support her answer. Which characteristics of Arpita you want to inculcate in your nature? 4



28

In the given figure, $AB = CD$, P and Q are points on AB and CD such that $AP = \frac{1}{3} AB$ and $CQ = \frac{1}{3} CD$ 4

Show that $AP = CQ$. State which axiom you use here. Also give two more axioms other than the axiom used in the above situation.



29

In the given figure, $\angle ABC = 30^\circ$, $\angle EDF = (40 - x)^\circ$ and $\angle ADE = (13x + 20)^\circ$. Show that BC is 4
parallel to DE :



30

Prove that sum of angles of a quadrilateral is 360° . Using this result, find the angles of a 4
quadrilateral, if they are in the ratio $4 : 6 : 3 : 5$

31

ABC and DBC are two isosceles triangle on the same base BC such that A and D lies on the 4
opposite sides of BC . Show that AD is the perpendicular bisector of BC .

-o0o0o0o-