

Exercise 9.1

1. Which of the following figures lie on the same base and in-between the same parallels? In such a case, write the common base and the two parallels.

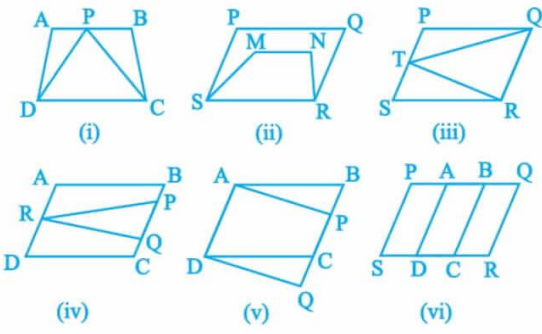


Fig. 9.8

Solution:

- (i) Trapezium ABCD and ΔPDC lie on the same DC and in-between the same parallel lines AB and DC.
- (ii) Parallelogram PQRS and trapezium SMNR lie on the same base SR but not in-between the same parallel lines.
- (iii) Parallelogram PQRS and ΔRTQ lie on the same base QR and in-between the same parallel lines QR and PS.
- (iv) Parallelogram ABCD and ΔPQR do not lie on the same base but in-between the same parallel lines BC and AD.
- (v) Quadrilateral ABQD and trapezium APCD lie on the same base AD and in-between the same parallel lines AD and BQ.
- (vi) Parallelogram PQRS and parallelogram ABCD do not lie on the same base SR but in-between the same parallel lines SR and PQ.

Exercise 9.2

1. In Fig. 9.15, ABCD is a parallelogram, $AE \perp DC$ and $CF \perp AD$. If $AB = 16$ cm, $AE = 8$ cm and $CF = 10$ cm, find AD.

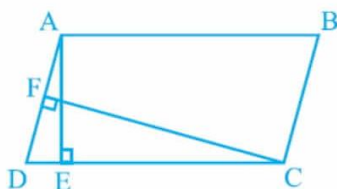


Fig. 9.15

Solution:

Given,

$AB = CD = 16$ cm (Opposite sides of a parallelogram)

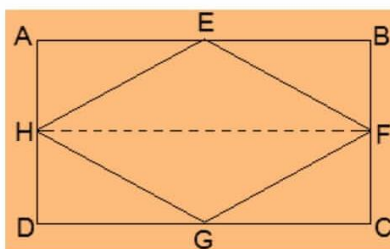
$CF = 10$ cm and $AE = 8$ cm

Now,

$$\begin{aligned} \text{Area of parallelogram} &= \text{Base} \times \text{Altitude} \\ &= CD \times AE = AD \times CF \\ &\Rightarrow 16 \times 8 = AD \times 10 \\ &\Rightarrow AD = 128/10 \text{ cm} \\ &\Rightarrow AD = 12.8 \text{ cm} \end{aligned}$$

2. If E, F, G and H are respectively the mid-points of the sides of a parallelogram ABCD, show that $\text{ar}(EFGH) = 1/2 \text{ar}(ABCD)$.

Solution:



Given,

E, F, G and H are the mid-points of the sides of a parallelogram ABCD respectively.

To Prove,

$$\text{ar}(EFGH) = \frac{1}{2} \text{ar}(ABCD)$$

Construction,

H and F are joined.

Proof,

$AD \parallel BC$ and $AD = BC$ (Opposite sides of a parallelogram)

$$\Rightarrow \frac{1}{2} AD = \frac{1}{2} BC$$

Also,

$AH \parallel BF$ and $DH \parallel CF$

$$\Rightarrow AH = BF \text{ and } DH = CF \text{ (H and F are mid points)}$$

\therefore , ABFH and HFCD are parallelograms.

Now,

NCERT Solution For Class 9 Maths Chapter 9- Areas Of Parallelograms And Triangles

We know that, $\triangle EFH$ and parallelogram $ABFH$, both lie on the same FH the common base and in-between the same parallel lines AB and HF .

\therefore area of $EFH = \frac{1}{2}$ area of $ABFH$ --- (i)

And, area of $GHF = \frac{1}{2}$ area of $HFC D$ --- (ii)

Adding (i) and (ii),

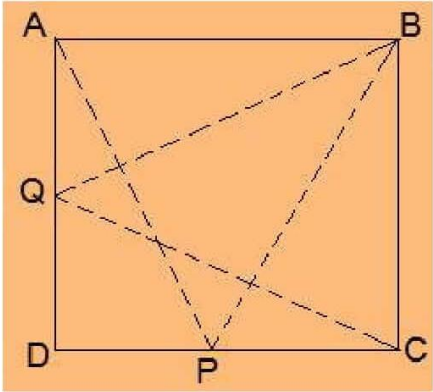
area of $\triangle EFH +$ area of $\triangle GHF = \frac{1}{2}$ area of $ABFH + \frac{1}{2}$ area of $HFC D$

\Rightarrow area of $EFGH =$ area of $ABFH$

\therefore ar ($EFGH$) = $\frac{1}{2}$ ar($ABCD$)

3. P and Q are any two points lying on the sides DC and AD respectively of a parallelogram ABCD. Show that ar(APB) = ar(BQC).

Solution:



$\triangle APB$ and parallelogram $ABCD$ lie on the same base AB and in-between same parallel AB and DC .

\therefore
 $\text{ar}(\triangle APB) = \frac{1}{2} \text{ar}(\text{parallelogram } ABCD)$ --- (i)

Similarly,

$\text{ar}(\triangle BQC) = \frac{1}{2} \text{ar}(\text{parallelogram } ABCD)$ --- (ii)

From (i) and (ii), we have

$\text{ar}(\triangle APB) = \text{ar}(\triangle BQC)$

4. In Fig. 9.16, P is a point in the interior of a parallelogram ABCD. Show that

- (i) $\text{ar}(\triangle APB) + \text{ar}(\triangle PCD) = \frac{1}{2} \text{ar}(\triangle ABCD)$
 - (ii) $\text{ar}(\triangle APD) + \text{ar}(\triangle PBC) = \text{ar}(\triangle APB) + \text{ar}(\triangle PCD)$
- [Hint : Through P, draw a line parallel to AB.]

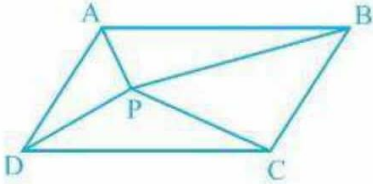
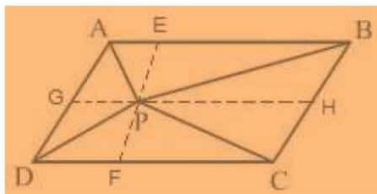


Fig. 9.16

Solution:

NCERT Solution For Class 9 Maths Chapter 9- Areas Of Parallelograms And Triangles



- (i) A line GH is drawn parallel to AB passing through P.

In a parallelogram,

$$AB \parallel GH \text{ (by construction) --- (i)}$$

\therefore ,

$$AD \parallel BC \Rightarrow AG \parallel BH \text{ --- (ii)}$$

From equations (i) and (ii),

ABHG is a parallelogram.

Now,

$\triangle APB$ and parallelogram ABHG are lying on the same base AB and in-between the same parallel lines AB and GH.

$$\therefore \text{ar}(\triangle APB) = \frac{1}{2} \text{ar}(\text{ABHG}) \text{ --- (iii)}$$

also,

$\triangle PCD$ and parallelogram CDGH are lying on the same base CD and in-between the same parallel lines CD and GH.

$$\therefore \text{ar}(\triangle PCD) = \frac{1}{2} \text{ar}(\text{CDGH}) \text{ --- (iv)}$$

Adding equations (iii) and (iv),

$$\text{ar}(\triangle APB) + \text{ar}(\triangle PCD) = \frac{1}{2} [\text{ar}(\text{ABHG}) + \text{ar}(\text{CDGH})]$$

$$\Rightarrow \text{ar}(\triangle APB) + \text{ar}(\triangle PCD) = \frac{1}{2} \text{ar}(\text{ABCD})$$

- (ii) A line EF is drawn parallel to AD passing through P.

In the parallelogram,

$$AD \parallel EF \text{ (by construction) --- (i)}$$

\therefore ,

$$AB \parallel CD \Rightarrow AE \parallel DF \text{ --- (ii)}$$

From equations (i) and (ii),

AEDF is a parallelogram.

Now,

$\triangle APD$ and parallelogram AEPD are lying on the same base AD and in-between the same parallel lines AD and EF.

$$\therefore \text{ar}(\triangle APD) = \frac{1}{2} \text{ar}(\text{AEPD}) \text{ --- (iii)}$$

also,

$\triangle PBC$ and parallelogram BCFE are lying on the same base BC and in-between the same parallel lines BC and EF.

$$\therefore \text{ar}(\triangle PBC) = \frac{1}{2} \text{ar}(\text{BCFE}) \text{ --- (iv)}$$

Adding equations (iii) and (iv),

$$\text{ar}(\triangle APD) + \text{ar}(\triangle PBC) = \frac{1}{2} \{ \text{ar}(\text{AEPD}) + \text{ar}(\text{BCFE}) \}$$

$$\Rightarrow \text{ar}(\triangle APD) + \text{ar}(\triangle PBC) = \text{ar}(\triangle APB) + \text{ar}(\triangle PCD)$$

5. In Fig. 9.17, PQRS and ABRS are parallelograms and X is any point on side BR. Show that

$$\text{ar}(\text{PQRS}) = \text{ar}(\text{ABRS})$$

$$\text{ar}(\text{AXS}) = \frac{1}{2} \text{ar}(\text{PQRS})$$

NCERT Solution For Class 9 Maths Chapter 9- Areas Of Parallelograms And Triangles

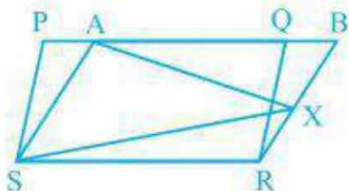


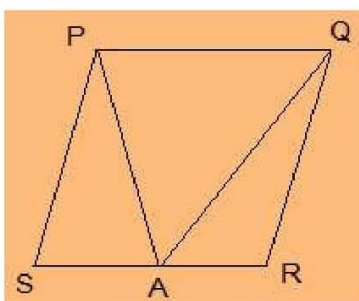
Fig. 9.17

Solution:

- (i) Parallelogram PQRS and ABRS lie on the same base SR and in-between the same parallel lines SR and PB.
 $\therefore \text{ar}(PQRS) = \text{ar}(ABRS)$ --- (i)
- (ii) $\triangle AXS$ and parallelogram ABRS are lying on the same base AS and in-between the same parallel lines AS and BR.
 $\therefore \text{ar}(\triangle AXS) = \frac{1}{2} \text{ar}(ABRS)$ --- (ii)
- From (i) and (ii), we find that,
 $\text{ar}(\triangle AXS) = \frac{1}{2} \text{ar}(PQRS)$

6. A farmer was having a field in the form of a parallelogram PQRS. She took any point A on RS and joined it to points P and Q. In how many parts the fields is divided? What are the shapes of these parts? The farmer wants to sow wheat and pulses in equal portions of the field separately. How should she do it?

Solution:



The field is divided into three parts each in triangular shape.

Let, $\triangle PSA$, $\triangle PAQ$ and $\triangle QAR$ be the triangles.

$$\text{Area of } \triangle PSA + \text{Area of } \triangle PAQ + \text{Area of } \triangle QAR = \text{Area of PQRS} \text{ --- (i)}$$

$$\text{Area of } \triangle PAQ = \frac{1}{2} \text{ area of PQRS} \text{ --- (ii)}$$

Here, the triangle and parallelogram are on the same base and in-between the same parallel lines.

From (i) and (ii),

$$\text{Area of } \triangle PSA + \text{Area of } \triangle QAR = \frac{1}{2} \text{ area of PQRS} \text{ --- (iii)}$$

From (ii) and (iii), we can conclude that,

The farmer must sow wheat or pulses in $\triangle PAQ$ or either in both $\triangle PSA$ and $\triangle QAR$.

Exercise 9.3

1. In Fig.9.23, E is any point on median AD of a ΔABC . Show that $\text{ar}(\text{ABE}) = \text{ar}(\text{ACE})$.

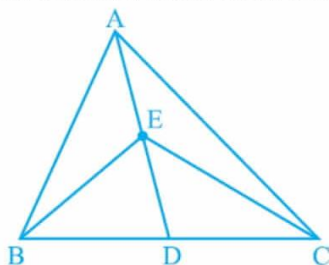


Fig. 9.23

Solution:

Given,

AD is median of ΔABC . \therefore , it will divide ΔABC into two triangles of equal area.

$$\therefore \text{ar}(\text{ABD}) = \text{ar}(\text{ACD}) \text{ --- (i)}$$

also,

ED is the median of ΔABC .

$$\therefore \text{ar}(\text{EBD}) = \text{ar}(\text{ECD}) \text{ --- (ii)}$$

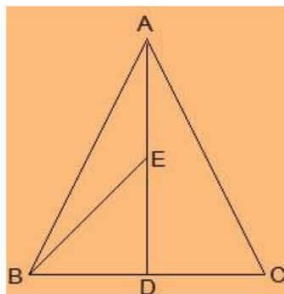
Subtracting (ii) from (i),

$$\text{ar}(\text{ABD}) - \text{ar}(\text{EBD}) = \text{ar}(\text{ACD}) - \text{ar}(\text{ECD})$$

$$\Rightarrow \text{ar}(\text{ABE}) = \text{ar}(\text{ACE})$$

2. In a triangle ABC, E is the mid-point of median AD. Show that $\text{ar}(\text{BED}) = \frac{1}{4} \text{ar}(\text{ABC})$.

Solution:



$$\text{ar}(\text{BED}) = \frac{1}{2} \times \text{BD} \times \text{DE}$$

Since, E is the mid-point of AD,

$$\text{AE} = \text{DE}$$

Since, AD is the median on side BC of triangle ABC,

$$\text{BD} = \text{DC}$$

\therefore ,

$$\text{DE} = \frac{1}{2} \text{AD} \text{ --- (i)}$$

$$\text{BD} = \frac{1}{2} \text{BC} \text{ --- (ii)}$$

From (i) and (ii), we get,

$$\text{ar}(\text{BED}) = \frac{1}{2} \times \frac{1}{2} \text{BC} \times \frac{1}{2} \text{AD}$$

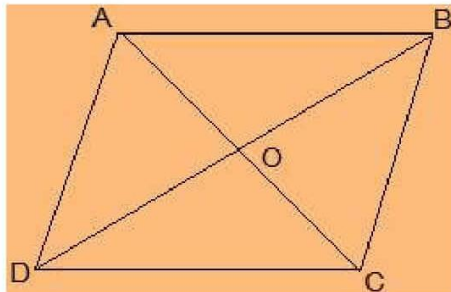
$$\Rightarrow \text{ar}(\text{BED}) = \frac{1}{2} \times \frac{1}{2} \text{ar}(\text{ABC})$$

NCERT Solution For Class 9 Maths Chapter 9- Areas Of Parallelograms And Triangles

$$\Rightarrow \text{ar}(\text{BED}) = \frac{1}{4} \text{ar}(\text{ABC})$$

3. Show that the diagonals of a parallelogram divide it into four triangles of equal area.

Solution:



O is the mid point of AC and BD. (diagonals of bisect each other)

In $\triangle ABC$, BO is the median.

$$\therefore \text{ar}(\text{AOB}) = \text{ar}(\text{BOC}) \text{ --- (i)}$$

also,

In $\triangle BCD$, CO is the median.

$$\therefore \text{ar}(\text{BOC}) = \text{ar}(\text{COD}) \text{ --- (ii)}$$

In $\triangle ACD$, OD is the median.

$$\therefore \text{ar}(\text{AOD}) = \text{ar}(\text{COD}) \text{ --- (iii)}$$

In $\triangle ABD$, AO is the median.

$$\therefore \text{ar}(\text{AOD}) = \text{ar}(\text{AOB}) \text{ --- (iv)}$$

From equations (i), (ii), (iii) and (iv), we get,

$$\text{ar}(\text{BOC}) = \text{ar}(\text{COD}) = \text{ar}(\text{AOD}) = \text{ar}(\text{AOB})$$

Hence, we get, the diagonals of a parallelogram divide it into four triangles of equal area.

4. In Fig. 9.24, ABC and ABD are two triangles on the same base AB. If line- segment CD is bisected by AB at O, show that: $\text{ar}(\text{ABC}) = \text{ar}(\text{ABD})$.

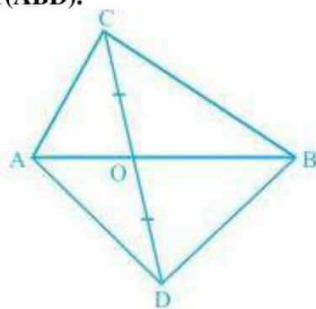


Fig. 9.24

Solution:

In $\triangle ABC$, AO is the median. (CD is bisected by AB at O)

$$\therefore \text{ar}(\text{AOC}) = \text{ar}(\text{AOD}) \text{ --- (i)}$$

also,

$\triangle BCD$, BO is the median. (CD is bisected by AB at O)

$$\therefore \text{ar}(\text{BOC}) = \text{ar}(\text{BOD}) \text{ --- (ii)}$$

Adding (i) and (ii),

We get,

$$\text{ar}(\text{AOC}) + \text{ar}(\text{BOC}) = \text{ar}(\text{AOD}) + \text{ar}(\text{BOD})$$

$$\Rightarrow \text{ar}(\text{ABC}) = \text{ar}(\text{ABD})$$

NCERT Solution For Class 9 Maths Chapter 9- Areas Of Parallelograms And Triangles

5. D, E and F are respectively the mid-points of the sides BC, CA and AB of a $\triangle ABC$.

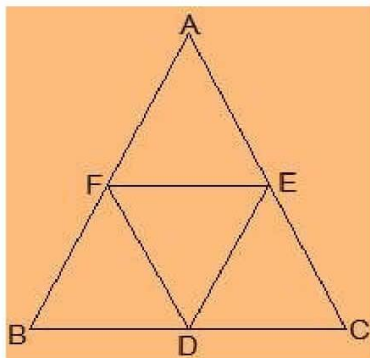
Show that

(i) BDEF is a parallelogram.

(ii) $\text{ar}(\triangle DEF) = \frac{1}{4} \text{ar}(\triangle ABC)$

(iii) $\text{ar}(\text{BDEF}) = \frac{1}{2} \text{ar}(\triangle ABC)$

Solution:



- (i) In $\triangle ABC$,
 $EF \parallel BC$ and $EF = \frac{1}{2} BC$ (by mid point theorem)
also,
 $BD = \frac{1}{2} BC$ (D is the mid point)
So, $BD = EF$
also,
BF and DE are parallel and equal to each other.
 \therefore , the pair opposite sides are equal in length and parallel to each other.
 \therefore BDEF is a parallelogram.
- (ii) Proceeding from the result of (i),
BDEF, DCEF, AFDE are parallelograms.
Diagonal of a parallelogram divides it into two triangles of equal area.
 $\therefore \text{ar}(\triangle BFD) = \text{ar}(\triangle DEF)$ (For parallelogram BDEF) --- (i)
also,
 $\text{ar}(\triangle AFE) = \text{ar}(\triangle DEF)$ (For parallelogram DCEF) --- (ii)
 $\text{ar}(\triangle CDE) = \text{ar}(\triangle DEF)$ (For parallelogram AFDE) --- (iii)
From (i), (ii) and (iii)
 $\text{ar}(\triangle BFD) = \text{ar}(\triangle AFE) = \text{ar}(\triangle CDE) = \text{ar}(\triangle DEF)$
 $\Rightarrow \text{ar}(\triangle BFD) + \text{ar}(\triangle AFE) + \text{ar}(\triangle CDE) + \text{ar}(\triangle DEF) = \text{ar}(\triangle ABC)$
 $\Rightarrow 4 \text{ar}(\triangle DEF) = \text{ar}(\triangle ABC)$
 $\Rightarrow \text{ar}(\triangle DEF) = \frac{1}{4} \text{ar}(\triangle ABC)$
- (iii) Area (parallelogram BDEF) = $\text{ar}(\triangle DEF) + \text{ar}(\triangle BDE)$
 $\Rightarrow \text{ar}(\text{parallelogram BDEF}) = \text{ar}(\triangle DEF) + \text{ar}(\triangle DEF)$
 $\Rightarrow \text{ar}(\text{parallelogram BDEF}) = 2 \times \text{ar}(\triangle DEF)$
 $\Rightarrow \text{ar}(\text{parallelogram BDEF}) = 2 \times \frac{1}{4} \text{ar}(\triangle ABC)$
 $\Rightarrow \text{ar}(\text{parallelogram BDEF}) = \frac{1}{2} \text{ar}(\triangle ABC)$

6. In Fig. 9.25, diagonals AC and BD of quadrilateral ABCD intersect at O such that $OB = OD$.

If $AB = CD$, then show that:

NCERT Solution For Class 9 Maths Chapter 9- Areas Of Parallelograms And Triangles

5. D, E and F are respectively the mid-points of the sides BC, CA and AB of a $\triangle ABC$.

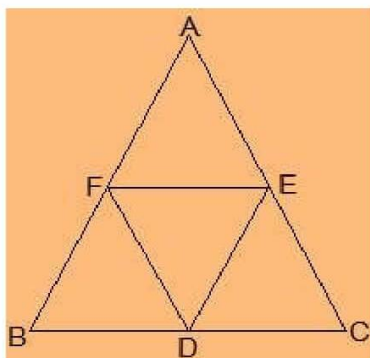
Show that

(i) BDEF is a parallelogram.

(ii) $\text{ar}(\triangle DEF) = \frac{1}{4} \text{ar}(\triangle ABC)$

(iii) $\text{ar}(\text{BDEF}) = \frac{1}{2} \text{ar}(\triangle ABC)$

Solution:



- (i) In $\triangle ABC$,
 $EF \parallel BC$ and $EF = \frac{1}{2} BC$ (by mid point theorem)
 also,
 $BD = \frac{1}{2} BC$ (D is the mid point)
 So, $BD = EF$
 also,
 BF and DE are parallel and equal to each other.
 \therefore , the pair opposite sides are equal in length and parallel to each other.
 \therefore BDEF is a parallelogram.
- (ii) Proceeding from the result of (i),
 $BDEF, DCEF, AFDE$ are parallelograms.
 Diagonal of a parallelogram divides it into two triangles of equal area.
 $\therefore \text{ar}(\triangle BFD) = \text{ar}(\triangle DEF)$ (For parallelogram BDEF) --- (i)
 also,
 $\text{ar}(\triangle AFE) = \text{ar}(\triangle DEF)$ (For parallelogram DCEF) --- (ii)
 $\text{ar}(\triangle CDE) = \text{ar}(\triangle DEF)$ (For parallelogram AFDE) --- (iii)
 From (i), (ii) and (iii)
 $\text{ar}(\triangle BFD) = \text{ar}(\triangle AFE) = \text{ar}(\triangle CDE) = \text{ar}(\triangle DEF)$
 $\Rightarrow \text{ar}(\triangle BFD) + \text{ar}(\triangle AFE) + \text{ar}(\triangle CDE) + \text{ar}(\triangle DEF) = \text{ar}(\triangle ABC)$
 $\Rightarrow 4 \text{ar}(\triangle DEF) = \text{ar}(\triangle ABC)$
 $\Rightarrow \text{ar}(\triangle DEF) = \frac{1}{4} \text{ar}(\triangle ABC)$
- (iii) Area (parallelogram BDEF) = $\text{ar}(\triangle DEF) + \text{ar}(\triangle BDE)$
 $\Rightarrow \text{ar}(\text{parallelogram BDEF}) = \text{ar}(\triangle DEF) + \text{ar}(\triangle DEF)$
 $\Rightarrow \text{ar}(\text{parallelogram BDEF}) = 2 \times \text{ar}(\triangle DEF)$
 $\Rightarrow \text{ar}(\text{parallelogram BDEF}) = 2 \times \frac{1}{4} \text{ar}(\triangle ABC)$
 $\Rightarrow \text{ar}(\text{parallelogram BDEF}) = \frac{1}{2} \text{ar}(\triangle ABC)$

6. In Fig. 9.25, diagonals AC and BD of quadrilateral ABCD intersect at O such that $OB = OD$.

If $AB = CD$, then show that:

NCERT Solution For Class 9 Maths Chapter 9- Areas Of Parallelograms And Triangles

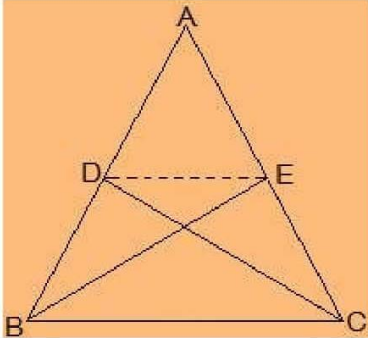
$$\begin{aligned} \text{ar}(\triangle DOE) + \text{ar}(\triangle DEC) &= \text{ar}(\triangle BOF) + \text{ar}(\triangle BFA) \\ \Rightarrow \text{ar}(\triangle DOC) &= \text{ar}(\triangle AOB) \end{aligned}$$

- ii. $\text{ar}(\triangle DOC) = \text{ar}(\triangle AOB)$
 Adding $\text{ar}(\triangle OCB)$ in LHS and RHS, we get,
 $\Rightarrow \text{ar}(\triangle DOC) + \text{ar}(\triangle OCB) = \text{ar}(\triangle AOB) + \text{ar}(\triangle OCB)$
 $\Rightarrow \text{ar}(\triangle DCB) = \text{ar}(\triangle ACB)$

- iii. When two triangles have same base and equal areas, the triangles will be in between the same parallel lines
 $\text{ar}(\triangle DCB) = \text{ar}(\triangle ACB)$
 $DA \parallel BC$ --- (iv)
 For quadrilateral ABCD, one pair of opposite sides are equal ($AB = CD$) and other pair of opposite sides are parallel.
 \therefore , ABCD is parallelogram.

7. D and E are points on sides AB and AC respectively of $\triangle ABC$ such that $\text{ar}(\triangle DBC) = \text{ar}(\triangle ECB)$. Prove that $DE \parallel BC$.

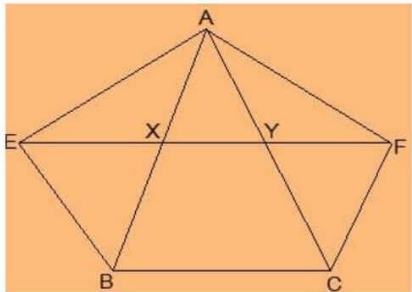
Solution:



$\triangle DBC$ and $\triangle ECB$ are on the same base BC and also having equal areas.
 \therefore , they will lie between the same parallel lines.
 \therefore , $DE \parallel BC$.

8. XY is a line parallel to side BC of a triangle ABC. If $BE \parallel AC$ and $CF \parallel AB$ meet XY at E and F respectively, show that $\text{ar}(\triangle ABE) = \text{ar}(\triangle ACF)$

Solution:



Given,

NCERT Solution For Class 9 Maths Chapter 9- Areas Of Parallelograms And Triangles

$XY \parallel BC$, $BE \parallel AC$ and $CF \parallel AB$
 To show,
 $ar(\triangle ABE) = ar(\triangle ACF)$
 Proof:
 $BCYE$ is a \parallel gm as $\triangle ABE$ and \parallel gm $BCYE$ are on the same base BE and between the same parallel lines BE and AC .
 $\therefore ar(\triangle ABE) = \frac{1}{2} ar(BCYE) \dots (1)$
 Now,
 $CF \parallel AB$ and $XY \parallel BC$
 $\Rightarrow CF \parallel AB$ and $XF \parallel BC$
 $\Rightarrow BCFX$ is a \parallel gm
 As $\triangle ACF$ and \parallel gm $BCFX$ are on the same base CF and in-between the same parallel AB and FC .
 $\therefore ar(\triangle ACF) = \frac{1}{2} ar(BCFX) \dots (2)$
 But,
 \parallel gm $BCFX$ and \parallel gm $BCYE$ are on the same base BC and between the same parallels BC and EF .
 $\therefore ar(BCFX) = ar(BCYE) \dots (3)$
 From (1), (2) and (3), we get
 $ar(\triangle ABE) = ar(\triangle ACF)$
 $\Rightarrow ar(\triangle ABE) = ar(\triangle ACF)$
 As the parallelograms are on the same base BC and in-between the same parallels EF and BC --(iii)
 Also,
 $\triangle AEB$ and \parallel gm $BEYC$ are on the same base BE and in-between the same parallels BE and AC .
 $\Rightarrow ar(\triangle AEB) = \frac{1}{2} ar(BCYE) \dots (iv)$
 Similarly,
 $\triangle ACF$ and \parallel gm $BXFC$ on the same base CF and between the same parallels CF and AB .
 $\Rightarrow ar(\triangle ACF) = \frac{1}{2} ar(BXFC) \dots (v)$
 From (iii), (iv) and (v),
 $ar(\triangle ABE) = ar(\triangle ACF)$

**9. The side AB of a parallelogram $ABCD$ is produced to any point P . A line through A and parallel to CP meets CB produced at Q and then parallelogram $PBQR$ is completed (see Fig. 9.26). Show that $ar(ABCD) = ar(PBQR)$.
 [Hint : Join AC and PQ . Now compare $ar(ACQ)$ and $ar(APQ)$.]**

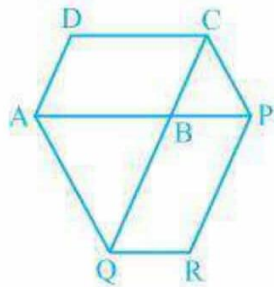
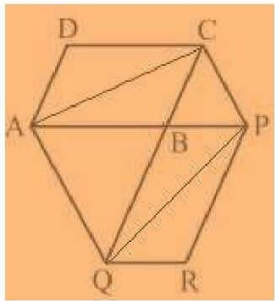


Fig. 9.26

Solution:

NCERT Solution For Class 9 Maths Chapter 9- Areas Of Parallelograms And Triangles



AC and PQ are joined.

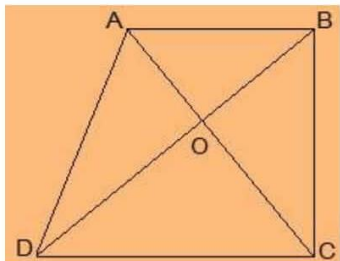
$$\begin{aligned} \text{Ar}(\triangle ACQ) &= \text{ar}(\triangle APQ) \text{ (On the same base AQ and between the same parallel lines AQ and CP)} \\ &\Rightarrow \text{ar}(\triangle ACQ) - \text{ar}(\triangle ABQ) = \text{ar}(\triangle APQ) - \text{ar}(\triangle ABQ) \\ &\Rightarrow \text{ar}(\triangle ABC) = \text{ar}(\triangle QBP) \text{ --- (i)} \end{aligned}$$

AC and QP are diagonals ABCD and PBQR.
 $\therefore \text{ar}(\triangle ABC) = \frac{1}{2} \text{ar}(\text{ABCD}) \text{ --- (ii)}$
 $\text{ar}(\triangle QBP) = \frac{1}{2} \text{ar}(\text{PBQR}) \text{ --- (iii)}$

From (i) and (ii),
 $\frac{1}{2} \text{ar}(\text{ABCD}) = \frac{1}{2} \text{ar}(\text{PBQR})$
 $\Rightarrow \text{ar}(\text{ABCD}) = \text{ar}(\text{PBQR})$

10. Diagonals AC and BD of a trapezium ABCD with AB || DC intersect each other at O. Prove that ar (AOD) = ar (BOC).

Solution:



$\triangle DAC$ and $\triangle DBC$ lie on the same base DC and between the same parallels AB and CD.

$$\begin{aligned} \text{Ar}(\triangle DAC) &= \text{ar}(\triangle DBC) \\ \Rightarrow \text{ar}(\triangle DAC) - \text{ar}(\triangle DOC) &= \text{ar}(\triangle DBC) - \text{ar}(\triangle DOC) \\ \Rightarrow \text{ar}(\triangle AOD) &= \text{ar}(\triangle BOC) \end{aligned}$$

11. In Fig. 9.27, ABCDE is a pentagon. A line through B parallel to AC meets DC produced at F.

Show that

- (i) $\text{ar}(\triangle ACB) = \text{ar}(\triangle ACF)$
- (ii) $\text{ar}(\text{AEDF}) = \text{ar}(\text{ABCDE})$

NCERT Solution For Class 9 Maths Chapter 9- Areas Of Parallelograms And Triangles

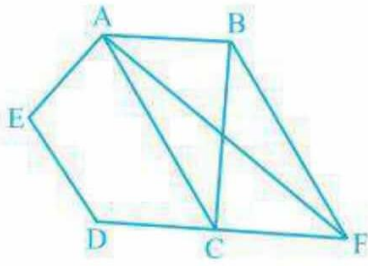


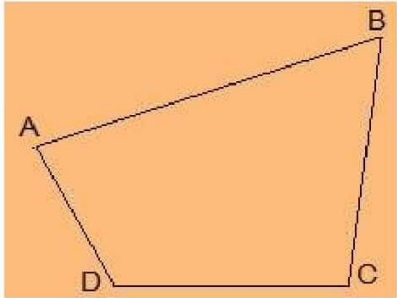
Fig. 9.27

Solution:

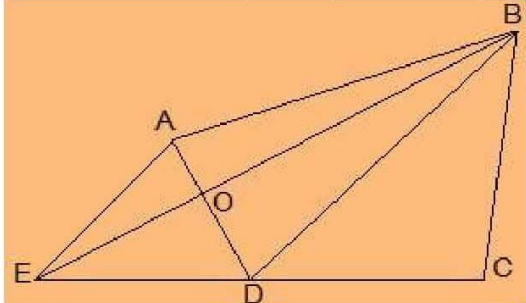
- (i) ΔACB and ΔACF lie on the same base AC and between the same parallels AC and BF .
 $\therefore \text{ar}(\Delta ACB) = \text{ar}(\Delta ACF)$
- (ii) $\text{ar}(\Delta ACB) = \text{ar}(\Delta ACF)$
 $\Rightarrow \text{ar}(\Delta ACB) + \text{ar}(\Delta ACD) = \text{ar}(\Delta ACF) + \text{ar}(\Delta ACD)$
 $\Rightarrow \text{ar}(ABCD) = \text{ar}(AEFD)$

12. A villager Itwaari has a plot of land of the shape of a quadrilateral. The Gram Panchayat of the village decided to take over some portion of his plot from one of the corners to construct a Health Centre. Itwaari agrees to the above proposal with the condition that he should be given equal amount of land in lieu of his land adjoining his plot so as to form a triangular plot. Explain how this proposal will be implemented.

Solution:



Let ABCD be the plot of the land of the shape of a quadrilateral.



- To Construct,
- Join the diagonal BD .
- Draw AE parallel to BD .

NCERT Solution For Class 9 Maths Chapter 9- Areas Of Parallelograms And Triangles

Join BE, that intersected AD at O.
 We get,
 $\triangle BCE$ is the shape of the original field
 $\triangle AOB$ is the area for constructing health centre.
 $\triangle DEO$ is the land joined to the plot.

To prove:

$$\text{ar}(\triangle DEO) = \text{ar}(\triangle AOB)$$

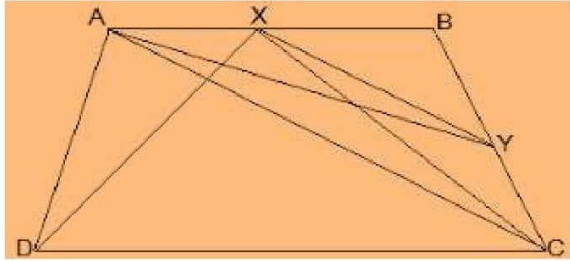
Proof:

$\triangle DEB$ and $\triangle DAB$ lie on the same base BD, in-between the same parallels BD and AE.
 $\text{Ar}(\triangle DEB) = \text{ar}(\triangle DAB)$
 $\Rightarrow \text{ar}(\triangle DEB) - \text{ar}(\triangle DOB) = \text{ar}(\triangle DAB) - \text{ar}(\triangle DOB)$
 $\Rightarrow \text{ar}(\triangle DEO) = \text{ar}(\triangle AOB)$

13. ABCD is a trapezium with $AB \parallel DC$. A line parallel to AC intersects AB at X and BC at Y. Prove that $\text{ar}(\triangle ADX) = \text{ar}(\triangle ACY)$.

[Hint : Join CX.]

Solution:



Given,

ABCD is a trapezium with $AB \parallel DC$.
 $XY \parallel AC$

Construction,

Join CX

To Prove,

$$\text{ar}(\triangle ADX) = \text{ar}(\triangle ACY)$$

Proof:

$\text{ar}(\triangle ADX) = \text{ar}(\triangle AXC)$ --- (i) (Since they are on the same base AX and in-between the same parallels AB and CD)

also,

$\text{ar}(\triangle AXC) = \text{ar}(\triangle ACY)$ --- (ii) (Since they are on the same base AC and in-between the same parallels XY and AC.)

(i) and (ii),

$$\text{ar}(\triangle ADX) = \text{ar}(\triangle ACY)$$

14. In Fig.9.28, $AP \parallel BQ \parallel CR$. Prove that $\text{ar}(\triangle AQC) = \text{ar}(\triangle PBR)$.

NCERT Solution For Class 9 Maths Chapter 9- Areas Of Parallelograms And Triangles

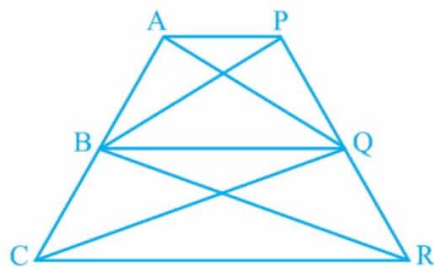


Fig. 9.28

Solution:

Given,

$$AP \parallel BQ \parallel CR$$

To Prove,

$$\text{ar}(\triangle AQC) = \text{ar}(\triangle PBR)$$

Proof:

$$\text{ar}(\triangle AQB) = \text{ar}(\triangle PBQ) \text{ --- (i) (Since they are on the same base BQ and between the same parallels AP and BQ.)}$$

also,

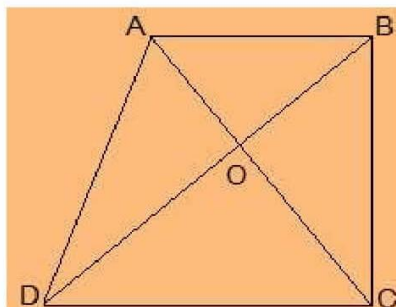
$$\text{ar}(\triangle BQC) = \text{ar}(\triangle BQR) \text{ --- (ii) (Since they are on the same base BQ and between the same parallels BQ and CR.)}$$

Adding (i) and (ii),

$$\begin{aligned} \text{ar}(\triangle AQB) + \text{ar}(\triangle BQC) &= \text{ar}(\triangle PBQ) + \text{ar}(\triangle BQR) \\ \Rightarrow \text{ar}(\triangle AQC) &= \text{ar}(\triangle PBR) \end{aligned}$$

15. Diagonals AC and BD of a quadrilateral ABCD intersect at O in such a way that $\text{ar}(\triangle AOD) = \text{ar}(\triangle BOC)$. Prove that ABCD is a trapezium.

Solution:



Given,

$$\text{ar}(\triangle AOD) = \text{ar}(\triangle BOC)$$

To Prove,

ABCD is a trapezium.

Proof:

$$\begin{aligned} \text{ar}(\triangle AOD) &= \text{ar}(\triangle BOC) \\ \Rightarrow \text{ar}(\triangle AOD) + \text{ar}(\triangle AOB) &= \text{ar}(\triangle BOC) + \text{ar}(\triangle AOB) \end{aligned}$$

NCERT Solution For Class 9 Maths Chapter 9- Areas Of Parallelograms And Triangles

\Rightarrow $\text{ar}(\triangle ADB) = \text{ar}(\triangle ACB)$
Areas of $\triangle ADB$ and $\triangle ACB$ are equal. \therefore , they must lying between the same parallel lines.
 \therefore , $AB \parallel CD$
 \therefore , $ABCD$ is a trapezium.

16. In Fig.9.29, $\text{ar}(\triangle DRC) = \text{ar}(\triangle DPC)$ and $\text{ar}(\triangle BDP) = \text{ar}(\triangle ARC)$. Show that both the quadrilaterals $ABCD$ and $DCPR$ are trapeziums.

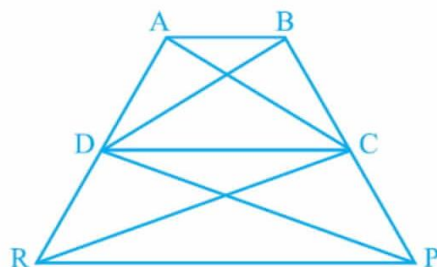


Fig. 9.29

Solution:

Given,

$$\text{ar}(\triangle DRC) = \text{ar}(\triangle DPC)$$

$$\text{ar}(\triangle BDP) = \text{ar}(\triangle ARC)$$

To Prove,

$ABCD$ and $DCPR$ are trapeziums.

Proof:

$$\text{ar}(\triangle BDP) = \text{ar}(\triangle ARC)$$

$$\Rightarrow \text{ar}(\triangle BDP) - \text{ar}(\triangle DPC) = \text{ar}(\triangle DRC)$$

$$\Rightarrow \text{ar}(\triangle BDC) = \text{ar}(\triangle ADC)$$

\therefore , $\text{ar}(\triangle BDC)$ and $\text{ar}(\triangle ADC)$ are lying in-between the same parallel lines.

$$\therefore, AB \parallel CD$$

$ABCD$ is a trapezium.

Similarly,

$$\text{ar}(\triangle DRC) = \text{ar}(\triangle DPC).$$

\therefore , $\text{ar}(\triangle DRC)$ and $\text{ar}(\triangle DPC)$ are lying in-between the same parallel lines.

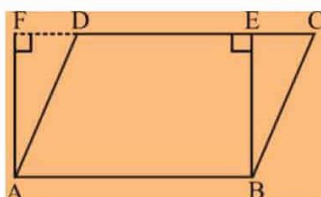
$$\therefore, DC \parallel PR$$

\therefore , $DCPR$ is a trapezium.

Exercise 9.4(Optional)*

1. Parallelogram ABCD and rectangle ABEF are on the same base AB and have equal areas. Show that the perimeter of the parallelogram is greater than that of the rectangle.

Solution:



Given,

|| gm ABCD and a rectangle ABEF have the same base AB and equal areas.

To prove,

Perimeter of || gm ABCD is greater than the perimeter of rectangle ABEF.

Proof,

We know that, the opposite sides of a || gm and rectangle are equal.

\therefore , $AB = DC$ [As ABCD is a || gm]

and, $AB = EF$ [As ABEF is a rectangle]

\therefore , $DC = EF$... (i)

Adding AB on both sides, we get,

$\Rightarrow AB + DC = AB + EF$... (ii)

We know that, the perpendicular segment is the shortest of all the segments that can be drawn to a given line from a point not lying on it.

\therefore , $BE < BC$ and $AF < AD$

$\Rightarrow BC > BE$ and $AD > AF$

$\Rightarrow BC + AD > BE + AF$... (iii)

Adding (ii) and (iii), we get

$AB + DC + BC + AD > AB + EF + BE + AF$

$\Rightarrow AB + BC + CD + DA > AB + BE + EF + FA$

\Rightarrow perimeter of || gm ABCD $>$ perimeter of rectangle ABEF.

\therefore , the perimeter of the parallelogram is greater than that of the rectangle.

Hence Proved.

2. In Fig. 9.30, D and E are two points on BC such that $BD = DE = EC$.

Show that $\text{ar}(\triangle ABD) = \text{ar}(\triangle ADE) = \text{ar}(\triangle AEC)$.

Can you now answer the question that you have left in the 'Introduction' of this chapter, whether the field of Budhia has been actually divided into three parts of equal area?

[Remark: Note that by taking $BD = DE = EC$, the triangle ABC is divided into three triangles ABD, ADE and AEC of equal areas. In the same way, by dividing BC into n equal parts and joining the points of division so obtained to the opposite vertex of BC, you can divide DABC into n triangles of equal areas.]

NCERT Solution For Class 9 Maths Chapter 9- Areas Of Parallelograms And Triangles

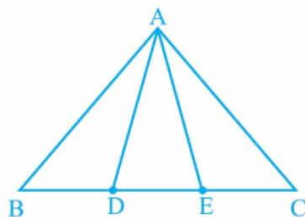


Fig. 9.30

Solution:

Given,

$$BD = DE = EC$$

To prove,

$$\text{ar}(\triangle ABD) = \text{ar}(\triangle ADE) = \text{ar}(\triangle AEC)$$

Proof,

In $(\triangle ABE)$, AD is median [since, $BD = DE$, given]

We know that, the median of a triangle divides it into two parts of equal areas

$$\therefore, \text{ar}(\triangle ABD) = \text{ar}(\triangle AED) \quad \text{---(i)}$$

Similarly,

In $(\triangle ADC)$, AE is median [since, $DE = EC$, given]

$$\therefore, \text{ar}(\triangle ADE) = \text{ar}(\triangle AEC) \quad \text{---(ii)}$$

From the equation (i) and (ii), we get

$$\text{ar}(\triangle ABD) = \text{ar}(\triangle ADE) = \text{ar}(\triangle AEC)$$

3. In Fig. 9.31, ABCD, DCFE and ABFE are parallelograms. Show that $\text{ar}(\triangle ADE) = \text{ar}(\triangle BCF)$.

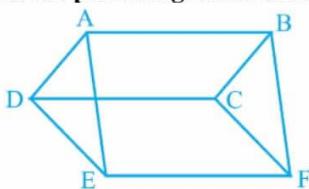


Fig. 9.31

Solution:

Given,

ABCD, DCFE and ABFE are parallelograms

To prove,

$$\text{ar}(\triangle ADE) = \text{ar}(\triangle BCF)$$

Proof,

In $\triangle ADE$ and $\triangle BCF$,

$$AD = BC \quad [\text{Since, they are the opposite sides of the parallelogram ABCD}]$$

$$DE = CF \quad [\text{Since, they are the opposite sides of the parallelogram DCFE}]$$

$$AE = BF \quad [\text{Since, they are the opposite sides of the parallelogram ABFE}]$$

$$\therefore, \triangle ADE \cong \triangle BCF \quad [\text{Using SSS Congruence theorem}]$$

$$\therefore, \text{ar}(\triangle ADE) = \text{ar}(\triangle BCF) \quad [\text{By CPCT}]$$

4. In Fig. 9.32, ABCD is a parallelogram and BC is produced to a point Q such that $AD = CQ$. If AQ intersect DC at P, show that $\text{ar}(\triangle BPC) = \text{ar}(\triangle DPQ)$.

NCERT Solution For Class 9 Maths Chapter 9- Areas Of Parallelograms And Triangles

[Hint : Join AC.]

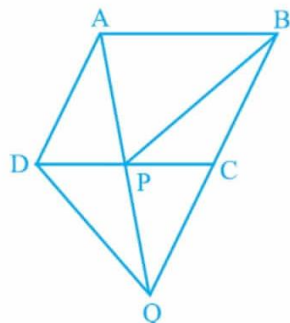


Fig. 9.32

Solution:

Given:

ABCD is a parallelogram
 $AD = CQ$

To prove:

$ar(\triangle BPC) = ar(\triangle DPQ)$

Proof:

In $\triangle ADP$ and $\triangle QCP$,

$\angle APD = \angle QPC$ [Vertically Opposite Angles]

$\angle ADP = \angle QCP$ [Alternate Angles]

$AD = CQ$ [given]

$\therefore, \triangle ADP \cong \triangle QCP$ [AAS congruency]

$\therefore, DP = CP$ [CPCT]

In $\triangle CDQ$, QP is median. [Since, $DP = CP$]

Since, median of a triangle divides it into two parts of equal areas.

$\therefore, ar(\triangle DPQ) = ar(\triangle QPC)$ ---(i)

In $\triangle BQD$, PC is median. [Since, $AD = CQ$ and $AD = BC \Rightarrow BC = CQ$]

Since, median of a triangle divides it into two parts of equal areas.

$\therefore, ar(\triangle QPC) = ar(\triangle BPC)$ ---(ii)

From the equation (i) and (ii), we get

$ar(\triangle BPC) = ar(\triangle DPQ)$

5. In Fig.9.33, ABC and BDE are two equilateral triangles such that D is the mid-point of BC. If AE intersects BC at F, show that:

NCERT Solution For Class 9 Maths Chapter 9- Areas Of Parallelograms And Triangles

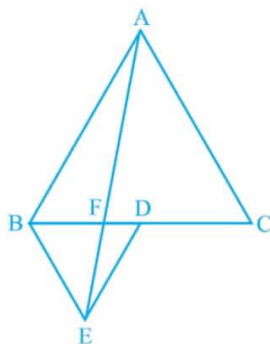
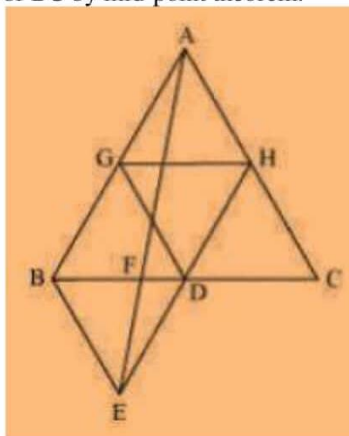


Fig. 9.33

- (i) $\text{ar}(\text{BDE}) = \frac{1}{4} \text{ar}(\text{ABC})$
- (ii) $\text{ar}(\text{BDE}) = \frac{1}{2} \text{ar}(\text{BAE})$
- (iii) $\text{ar}(\text{ABC}) = 2 \text{ar}(\text{BEC})$
- (iv) $\text{ar}(\text{BFE}) = \text{ar}(\text{AFD})$
- (v) $\text{ar}(\text{BFE}) = 2 \text{ar}(\text{FED})$
- (vi) $\text{ar}(\text{FED}) = \frac{1}{8} \text{ar}(\text{AFC})$

Solution:

- (i) Assume that G and H are the mid-points of the sides AB and AC respectively. Join the mid-points with line-segment GH. Here, GH is parallel to third side. \therefore , BC will be half of the length of BC by mid-point theorem.



- \therefore $\text{GH} = \frac{1}{2} \text{BC}$ and $\text{GH} \parallel \text{BC}$
- \therefore $\text{GH} = \text{BD} = \text{DC}$ and $\text{GH} \parallel \text{BD}$ (Since, D is the mid-point of BC)
- Similarly,
- $\text{GD} = \text{HC} = \text{HA}$
- $\text{HD} = \text{AG} = \text{BG}$

\therefore , $\triangle \text{ABC}$ is divided into 4 equal equilateral triangles $\triangle \text{BGD}$, $\triangle \text{AGH}$, $\triangle \text{DHC}$ and $\triangle \text{GHD}$

We can say that,

$$\triangle \text{BGD} = \frac{1}{4} \triangle \text{ABC}$$

Considering, $\triangle \text{BDG}$ and $\triangle \text{BDE}$

$$\text{BD} = \text{BD} \text{ (Common base)}$$

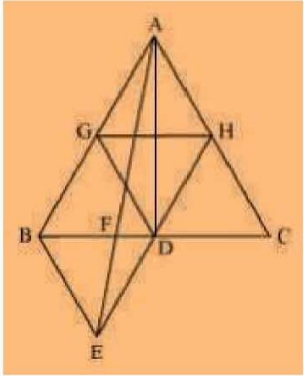
Since both triangles are equilateral triangle, we can say that,

$$\text{BG} = \text{BE}$$

NCERT Solution For Class 9 Maths Chapter 9- Areas Of Parallelograms And Triangles

$DG = DE$
 $\therefore \Delta BDG \cong \Delta BDE$ [By SSS congruency]
 \therefore , area $(\Delta BDG) =$ area (ΔBDE)
 area $(\Delta BDE) = \frac{1}{4}$ ar (ΔABC)
 Hence proved

(ii)



$\text{ar}(\Delta BDE) = \text{ar}(\Delta AED)$ (Common base DE and $DE \parallel AB$)
 $\text{ar}(\Delta BDE) - \text{ar}(\Delta FED) = \text{ar}(\Delta AED) - \text{ar}(\Delta FED)$
 $\text{ar}(\Delta BEF) = \text{ar}(\Delta AFD)$... (i)
 Now,
 $\text{ar}(\Delta ABD) = \text{ar}(\Delta ABF) + \text{ar}(\Delta AFD)$
 $\text{ar}(\Delta ABD) = \text{ar}(\Delta ABF) + \text{ar}(\Delta BEF)$ [From equation (i)]
 $\text{ar}(\Delta ABD) = \text{ar}(\Delta ABE)$... (ii)

AD is the median of ΔABC .
 $\text{ar}(\Delta ABD) = \frac{1}{2}$ ar (ΔABC)
 $= \frac{4}{2}$ ar (ΔBDE)
 $= 2$ ar (ΔBDE) ... (iii)

From (ii) and (iii), we obtain
 2 ar $(\Delta BDE) = \text{ar}(\Delta ABE)$
 $\text{ar}(\Delta BDE) = \frac{1}{2}$ ar (ΔABE)
 Hence proved

(iii) $\text{ar}(\Delta ABE) = \text{ar}(\Delta BEC)$ [Common base BE and $BE \parallel AC$]
 $\text{ar}(\Delta ABF) + \text{ar}(\Delta BEF) = \text{ar}(\Delta BEC)$
 From eqⁿ (i), we get,
 $\text{ar}(\Delta ABF) + \text{ar}(\Delta AFD) = \text{ar}(\Delta BEC)$
 $\text{ar}(\Delta ABD) = \text{ar}(\Delta BEC)$
 $\frac{1}{2}$ ar $(\Delta ABC) = \text{ar}(\Delta BEC)$
 $\text{ar}(\Delta ABC) = 2$ ar (ΔBEC)
 Hence proved

(iv) ΔBDE and ΔAED lie on the same base (DE) and are in-between the parallel lines DE and AB.
 \therefore ar $(\Delta BDE) = \text{ar}(\Delta AED)$
 Subtracting ar (ΔFED) from L.H.S and R.H.S,
 We get,

NCERT Solution For Class 9 Maths Chapter 9- Areas Of Parallelograms And Triangles

$$\begin{aligned} \therefore \text{ar}(\triangle BDE) - \text{ar}(\triangle FED) &= \text{ar}(\triangle AED) - \text{ar}(\triangle FED) \\ \therefore \text{ar}(\triangle BFE) &= \text{ar}(\triangle AFD) \end{aligned}$$

Hence proved

(v) Assume that h is the height of vertex E, corresponding to the side BD in $\triangle BDE$.
 Also assume that H is the height of vertex A, corresponding to the side BC in $\triangle ABC$.
 While solving Question (i),

We saw that,
 $\text{ar}(\triangle BDE) = \frac{1}{4} \text{ar}(\triangle ABC)$

While solving Question (iv),
 We saw that,
 $\text{ar}(\triangle BFE) = \text{ar}(\triangle AFD)$
 $\therefore \text{ar}(\triangle BFE) = \text{ar}(\triangle AFD)$
 $= 2 \text{ar}(\triangle FED)$

Hence, $\text{ar}(\triangle BFE) = 2 \text{ar}(\triangle FED)$
 Hence proved

(vi) $\text{ar}(\triangle AFC) = \text{ar}(\triangle AFD) + \text{ar}(\triangle ADC)$
 $= 2 \text{ar}(\triangle FED) + \frac{1}{2} \text{ar}(\triangle ABC)$ [using (v)]
 $= 2 \text{ar}(\triangle FED) + \frac{1}{2} [4 \text{ar}(\triangle BDE)]$ [Using result of Question (i)]
 $= 2 \text{ar}(\triangle FED) + 2 \text{ar}(\triangle BDE)$

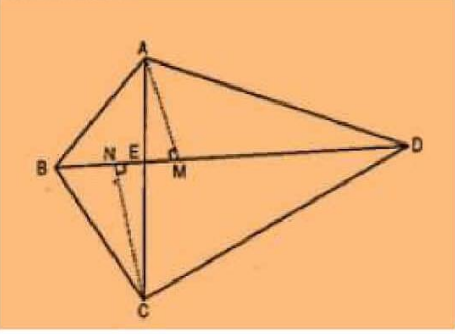
Since, $\triangle BDE$ and $\triangle AED$ are on the same base and between same parallels
 $= 2 \text{ar}(\triangle FED) + 2 \text{ar}(\triangle AED)$
 $= 2 \text{ar}(\triangle FED) + 2 [\text{ar}(\triangle AFD) + \text{ar}(\triangle FED)]$
 $= 2 \text{ar}(\triangle FED) + 2 \text{ar}(\triangle AFD) + 2 \text{ar}(\triangle FED)$ [From question (viii)]
 $= 4 \text{ar}(\triangle FED) + 2 \text{ar}(\triangle AFD)$
 $\Rightarrow \text{ar}(\triangle AFC) = 8 \text{ar}(\triangle FED)$
 $\Rightarrow \text{ar}(\triangle FED) = \frac{1}{8} \text{ar}(\triangle AFC)$
 Hence proved

**6. Diagonals AC and BD of a quadrilateral ABCD intersect each other at P. Show that $\text{ar}(\triangle APB) \times \text{ar}(\triangle CPD) = \text{ar}(\triangle APD) \times \text{ar}(\triangle BPC)$.
 [Hint : From A and C, draw perpendiculars to BD.]**

Solution:

Given:
 The diagonal AC and BD of the quadrilateral ABCD, intersect each other at point E.

Construction:
 From A, draw AM perpendicular to BD
 From C, draw CN perpendicular to BD



NCERT Solution For Class 9 Maths Chapter 9- Areas Of Parallelograms And Triangles

To Prove,

$$\text{ar}(\triangle AED) \times \text{ar}(\triangle BEC) = \text{ar}(\triangle ABE) \times \text{ar}(\triangle CDE)$$

Proof,

$$\text{ar}(\triangle ABE) = \frac{1}{2} \times BE \times AM \dots\dots\dots (i)$$

$$\text{ar}(\triangle AED) = \frac{1}{2} \times DE \times AM \dots\dots\dots (ii)$$

Dividing eq. ii by i , we get,

$$\frac{\text{ar}(\triangle AED)}{\text{ar}(\triangle ABE)} = \frac{\frac{1}{2} \times DE \times AM}{\frac{1}{2} \times BE \times AM}$$

$$\text{ar}(\triangle AED)/\text{ar}(\triangle ABE) = DE/BE \dots\dots\dots (iii)$$

Similarly,

$$\text{ar}(\triangle CDE)/\text{ar}(\triangle BEC) = DE/BE \dots\dots\dots (iv)$$

From eq. (iii) and (iv) , we get

$$\text{ar}(\triangle AED)/\text{ar}(\triangle ABE) = \text{ar}(\triangle CDE)/\text{ar}(\triangle BEC)$$

$$\therefore, \text{ar}(\triangle AED) \times \text{ar}(\triangle BEC) = \text{ar}(\triangle ABE) \times \text{ar}(\triangle CDE)$$

Hence proved.

7. P and Q are respectively the mid-points of sides AB and BC of a triangle ABC and R is the mid-point of AP, show that:

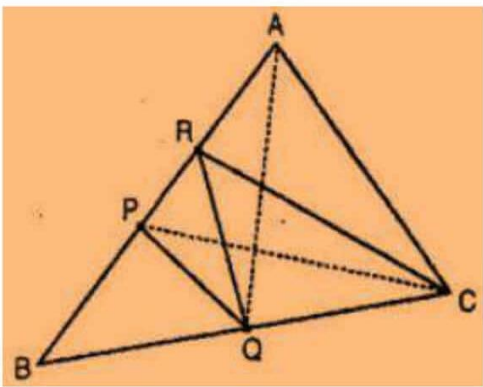
(i) $\text{ar}(\triangle PRQ) = \frac{1}{2} \text{ar}(\triangle ARC)$

(ii) $\text{ar}(\triangle RQC) = \frac{3}{8} \text{ar}(\triangle ABC)$

(iii) $\text{ar}(\triangle PBQ) = \text{ar}(\triangle ARC)$

Solution:

(i)



We know that, median divides the triangle into two triangles of equal area,

PC is the median of ABC.

$$\text{Ar}(\triangle BPC) = \text{ar}(\triangle APC) \dots\dots\dots(i)$$

RC is the median of APC.

$$\text{Ar}(\triangle ARC) = \frac{1}{2} \text{ar}(\triangle APC) \dots\dots\dots(ii)$$

PQ is the median of BPC.

NCERT Solution For Class 9 Maths Chapter 9- Areas Of Parallelograms And Triangles

$$\text{Ar } (\Delta PQC) = \frac{1}{2} \text{ ar } (\Delta BPC) \dots\dots\dots(\text{iii})$$

From eq. (i) and (iii), we get,

$$\text{ar } (\Delta PQC) = \frac{1}{2} \text{ ar } (\Delta APC) \dots\dots\dots(\text{iv})$$

From eq. (ii) and (iv), we get,

$$\text{ar } (\Delta PQC) = \text{ ar } (\Delta ARC) \dots\dots\dots(\text{v})$$

P and Q are the mid-points of AB and BC respectively [given]

$$\therefore PQ \parallel AC$$

$$\text{and, } PA = \frac{1}{2} AC$$

Since, triangles of same parallel are equal in area, we get,

$$\text{ar } (\Delta APQ) = \text{ ar } (\Delta PQC) \dots\dots\dots(\text{vi})$$

From eq. (v) and (vi), we obtain,

$$\text{ar } (\Delta APQ) = \text{ ar } (\Delta ARC) \dots\dots\dots(\text{vii})$$

R is the mid-point of AP.

\therefore , RQ is the median of APQ.

$$\text{Ar } (\Delta PRQ) = \frac{1}{2} \text{ ar } (\Delta APQ) \dots\dots\dots(\text{viii})$$

From (vii) and (viii), we get,

$$\text{ar } (\Delta PRQ) = \frac{1}{2} \text{ ar } (\Delta ARC)$$

Hence Proved.

(ii) PQ is the median of ΔBPC

$$\begin{aligned} \text{ar } (\Delta PQC) &= \frac{1}{2} \text{ ar } (\Delta BPC) \\ &= \left(\frac{1}{2}\right) \times \left(\frac{1}{2}\right) \text{ ar } (\Delta ABC) \\ &= \frac{1}{4} \text{ ar } (\Delta ABC) \dots\dots\dots(\text{ix}) \end{aligned}$$

Also,

$$\begin{aligned} \text{ar } (\Delta PRC) &= \frac{1}{2} \text{ ar } (\Delta APC) \quad [\text{From (iv)}] \\ \text{ar } (\Delta PRC) &= \left(\frac{1}{2}\right) \times \left(\frac{1}{2}\right) \text{ ar } (\Delta ABC) \\ &= \frac{1}{4} \text{ ar } (\Delta ABC) \dots\dots\dots(\text{x}) \end{aligned}$$

Add eq. (ix) and (x), we get,

$$\begin{aligned} \text{ar } (\Delta PQC) + \text{ ar } (\Delta PRC) &= \left(\frac{1}{4}\right) \times \left(\frac{1}{4}\right) \text{ ar } (\Delta ABC) \\ \text{ar (quad. PQCR)} &= \frac{1}{4} \text{ ar } (\Delta ABC) \dots\dots\dots(\text{xi}) \end{aligned}$$

Subtracting $\text{ar } (\Delta PRQ)$ from L.H.S and R.H.S,

$$\begin{aligned} \text{ar (quad. PQCR)} - \text{ar } (\Delta PRQ) &= \frac{1}{2} \text{ ar } (\Delta ABC) - \text{ar } (\Delta PRQ) \\ \text{ar } (\Delta RQC) &= \frac{1}{2} \text{ ar } (\Delta ABC) - \frac{1}{2} \text{ ar } (\Delta ARC) \quad [\text{From result (i)}] \\ \text{ar } (\Delta ARC) &= \frac{1}{2} \text{ ar } (\Delta ABC) - \left(\frac{1}{2}\right) \times \left(\frac{1}{2}\right) \text{ ar } (\Delta APC) \\ \text{ar } (\Delta RQC) &= \frac{1}{2} \text{ ar } (\Delta ABC) - \left(\frac{1}{4}\right) \text{ ar } (\Delta APC) \\ \text{ar } (\Delta RQC) &= \frac{1}{2} \text{ ar } (\Delta ABC) - \left(\frac{1}{4}\right) \times \left(\frac{1}{2}\right) \text{ ar } (\Delta ABC) \quad [\text{As, PC is median of } \Delta ABC] \end{aligned}$$

$$\begin{aligned} \text{ar } (\Delta RQC) &= \frac{1}{2} \text{ ar } (\Delta ABC) - \left(\frac{1}{8}\right) \text{ ar } (\Delta ABC) \\ \text{ar } (\Delta RQC) &= \left[\left(\frac{1}{2}\right) - \left(\frac{1}{8}\right)\right] \text{ ar } (\Delta ABC) \\ \text{ar } (\Delta RQC) &= \left(\frac{3}{8}\right) \text{ ar } (\Delta ABC) \end{aligned}$$

(iii) $\text{ar } (\Delta PRQ) = \frac{1}{2} \text{ ar } (\Delta ARC)$ [From result (i)]

$$2 \text{ ar } (\Delta PRQ) = \text{ ar } (\Delta ARC) \dots\dots\dots(\text{xii})$$

$$\text{ar } (\Delta PRQ) = \frac{1}{2} \text{ ar } (\Delta APQ) \quad [\text{RQ is the median of APQ}] \dots\dots\dots(\text{xiii})$$

NCERT Solution For Class 9 Maths Chapter 9- Areas Of Parallelograms And Triangles

But, we know that,
 $\text{ar}(\Delta APQ) = \text{ar}(\Delta PQC)$ [From the reason mentioned in eq. (vi)](xiv)
 From eq. (xiii) and (xiv), we get,
 $\text{ar}(\Delta PRQ) = \frac{1}{2} \text{ar}(\Delta PQC)$ (xv)
 At the same time,
 $\text{ar}(\Delta BPQ) = \text{ar}(\Delta PQC)$ [PQ is the median of ΔBPC](xvi)
 From eq. (xv) and (xvi), we get,
 $\text{ar}(\Delta PRQ) = \frac{1}{2} \text{ar}(\Delta BPQ)$ (xvii)
 From eq. (xii) and (xvii), we get,
 $2 \times (\frac{1}{2}) \text{ar}(\Delta BPQ) = \text{ar}(\Delta ARC)$
 $\Rightarrow \text{ar}(\Delta BPQ) = \text{ar}(\Delta ARC)$
 Hence Proved.

8. In Fig. 9.34, ABC is a right triangle right angled at A. BCED, ACFG and ABMN are squares on the sides BC, CA and AB respectively. Line segment AX \perp DE meets BC at Y. Show that:

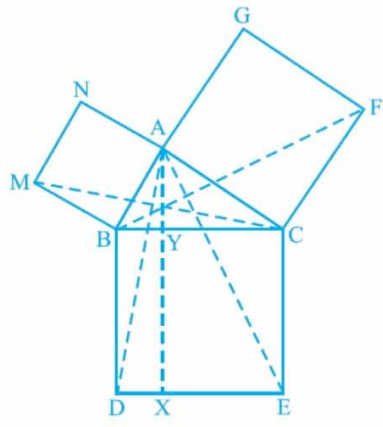


Fig. 9.34

- (i) $\Delta MBC \cong \Delta ABD$
- (ii) $\text{ar}(\text{BYXD}) = 2\text{ar}(\text{MBC})$
- (iii) $\text{ar}(\text{BYXD}) = \text{ar}(\text{ABMN})$
- (iv) $\Delta FCB \cong \Delta ACE$
- (v) $\text{ar}(\text{CYXE}) = 2\text{ar}(\text{FCB})$
- (vi) $\text{ar}(\text{CYXE}) = \text{ar}(\text{ACFG})$
- (vii) $\text{ar}(\text{BCED}) = \text{ar}(\text{ABMN}) + \text{ar}(\text{ACFG})$

Note : Result (vii) is the famous Theorem of Pythagoras. You shall learn a simpler proof of this theorem in Class X.

Solution:

- (i) We know that each angle of a square is 90° . Hence, $\angle ABM = \angle DBC = 90^\circ$

NCERT Solution For Class 9 Maths Chapter 9- Areas Of Parallelograms And Triangles

$$\therefore \angle ABM + \angle ABC = \angle DBC + \angle ABC$$

$$\therefore \angle MBC = \angle ABD$$

In $\triangle MBC$ and $\triangle ABD$,

$$\angle MBC = \angle ABD \text{ (Proved above)}$$

$$MB = AB \text{ (Sides of square ABMN)}$$

$$BC = BD \text{ (Sides of square BCED)}$$

$$\therefore \triangle MBC \cong \triangle ABD \text{ (SAS congruency)}$$

(ii) We have

$$\triangle MBC \cong \triangle ABD$$

$$\therefore \text{ar}(\triangle MBC) = \text{ar}(\triangle ABD) \dots \text{(i)}$$

It is given that $AX \perp DE$ and $BD \perp DE$ (Adjacent sides of square BDEC)

$$\therefore BD \parallel AX \text{ (Two lines perpendicular to same line are parallel to each other)}$$

$\triangle ABD$ and parallelogram $BYXD$ are on the same base BD and between the same parallels BD and AX .

$$\text{Area}(\triangle YXD) = 2 \text{Area}(\triangle MBC) \text{ [From equation (i)]} \dots \text{(ii)}$$

(iii) $\triangle MBC$ and parallelogram $ABMN$ are lying on the same base MB and between same parallels MB and NC .

$$2 \text{ar}(\triangle MBC) = \text{ar}(\triangle BMN)$$

$$\text{ar}(\triangle YXD) = \text{ar}(\triangle BMN) \text{ [From equation (ii)]} \dots \text{(iii)}$$

(iv) We know that each angle of a square is 90° .

$$\therefore \angle FCA = \angle BCE = 90^\circ$$

$$\therefore \angle FCA + \angle ACB = \angle BCE + \angle ACB$$

$$\therefore \angle FCB = \angle ACE$$

In $\triangle FCB$ and $\triangle ACE$,

$$\angle FCB = \angle ACE$$

$$FC = AC \text{ (Sides of square ACFG)}$$

$$CB = CE \text{ (Sides of square BCED)}$$

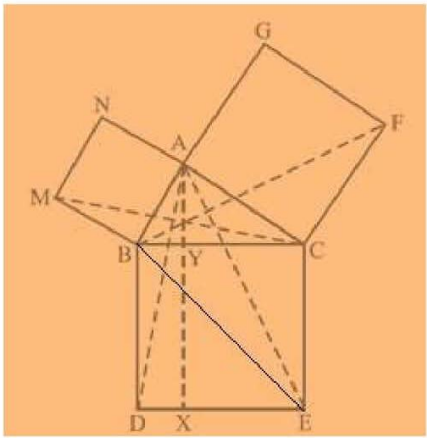
$$\triangle FCB \cong \triangle ACE \text{ (SAS congruency)}$$

(v) $AX \perp DE$ and $CE \perp DE$ (Adjacent sides of square BDEC) [given]

Hence,

$$CE \parallel AX \text{ (Two lines perpendicular to the same line are parallel to each other)}$$

NCERT Solution For Class 9 Maths Chapter 9- Areas Of Parallelograms And Triangles



Consider BACE and parallelogram CYXE
 BACE and parallelogram CYXE are on the same base CE and between the same parallels CE and AX.

$$\therefore \text{ar} (\Delta YXE) = 2 \text{ar} (\Delta ACE) \dots \text{(iv)}$$

We had proved that

$$\begin{aligned} \therefore \Delta FCB &\cong \Delta ACE \\ \text{ar} (\Delta FCB) &\cong \text{ar} (\Delta ACE) \dots \text{(v)} \end{aligned}$$

From equations (iv) and (v), we get

$$\text{ar} (CYXE) = 2 \text{ar} (\Delta FCB) \dots \text{(vi)}$$

- (vi) Consider BFCB and parallelogram ACFG
 BFCB and parallelogram ACFG are lying on the same base CF and between the same parallels CF and BG.

$$\begin{aligned} \therefore \text{ar} (ACFG) &= 2 \text{ar} (\Delta FCB) \\ \therefore \text{ar} (ACFG) &= \text{ar} (CYXE) \text{ [From equation (vi)]} \dots \text{(vii)} \end{aligned}$$

- (vii) From the figure, we can observe that
 $\text{ar} (BCED) = \text{ar} (BYXD) + \text{ar} (CYXE)$
 $\therefore \text{ar} (BCED) = \text{ar} (ABMN) + \text{ar} (ACFG) \text{ [From equations (iii) and (vii)].}$